




Name: _____

Stuffed Animals - Pictograph

Stuffed Animals Owned By Students

Name	Number of Stuffed Animals
Sara	
Billy	
Jess	




 = 2 stuffed animals

1. How many stuffed animals does Sara have? _____
2. How many stuffed animals does Jess have? _____
3. How many stuffed animals does Billy have? _____
4. Who has the most stuffed animals? _____
5. Who has the fewest stuffed animals? _____
6. Does Jess or Sara have more stuffed animals? _____
7. Who has six stuffed animals? _____

Name: _____

Stuffed Animals - Pictograph

Stuffed Animals Owned By Students

Name	Number of Stuffed Animals
Sara	 <u>4</u>
Billy	 <u>10</u>
Jess	 <u>6</u>



= 2 stuffed animals

1. How many stuffed animals does Sara have? 4
2. How many stuffed animals does Jess have? 6
3. How many stuffed animals does Billy have? 10
4. Who has the most stuffed animals? Billy
5. Who has the fewest stuffed animals? Sara
6. Does Jess or Sara have more stuffed animals? Jess
7. Who has six stuffed animals? Jess